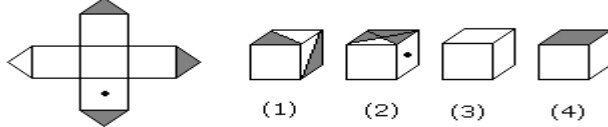


- A) 1      (B) 2      (C) 3      (D) 4      (E) 5  
 A. 1      B. 2      C. 3      D. 4      E. 5

15. The figure given on the left hand side in each of the following questions is folded to form a box. Choose from the alternatives (1), (2), (3) and (4) the boxes that is similar to the box formed.



- A. 1 and 2 only      B. 2 and 4 only      C. 2 and 3 only      D. 1 and 4 only

16. In these series, you will be looking at both the letter pattern and the number pattern. Fill the blank in the middle of the series or end of the series.

ZA<sub>5</sub>, Y<sub>4</sub>B, XC<sub>6</sub>, W<sub>3</sub>D,

- A. E<sub>7</sub>V      B. V<sub>2</sub>E      C. VE<sub>5</sub>      D. VE<sub>7</sub>

17. Here are some words translated from an artificial language.

*hapllesh* means cloudburst

*srenchoch* means pinball

*resbosrench* means ninepin

Which word could mean "cloud nine"?

- A. leshsrench      B. ochhapl      C. haploch      D. haplresbo

18. Here are some words translated from an artificial language.

*moolokarn* means blue sky

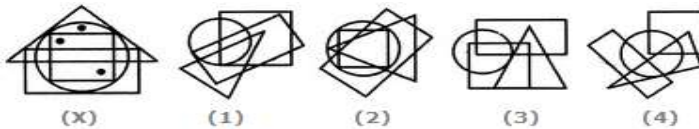
*wilkospadi* means bicycle race

*moolowilko* means blue bicycle

Which word could mean "racecar"?

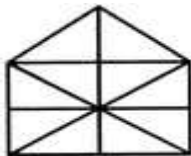
- A. wilkozwet      B. spadiwilko      C. moolobreil      D. spadivolo

19. Select the figure which satisfies the same conditions of placement of the dots as in Figure-X.



- A. 1      B. 2      C. 3      D. 4

20. Find the number of triangles in the given figure.



- A. 10      B. 19      C. 21      D. 23

21. If A + B means A is the brother of B; A - B means A is the sister of B and A x B means A is the father of B. Which of the following means that C is the son of M?

- A. M - N x C + F      B. F - C + N x M      C. N + M - F x C      D. M x N - C + F

22. Choose the correct alternative that will continue the same pattern and replace the question mark in the given series. 3, 4, 7, 7, 13, 13, 21, 22, 31, 34, ?

- A. 42      B. 43      C. 51      D. 52

23. The average of 20 numbers is zero. Of them, at the most, how many may be greater than zero?

- A. 0      B. 1      C. 10      D. 19

24. What was the day of the week on 17<sup>th</sup> June, 1998?

- A. Monday      B. Tuesday      C. Wednesday      D. Thursday

25. Arrange the words given below in a meaningful sequence.

- A. 3, 1, 2, 4, 5      B. 3, 1, 2, 5, 4      C. 3, 1, 4, 2, 5      D. 3, 1, 4, 5, 2